


## MESURER DES MASSES

1) Écris dans les cases les numéros des dessins du plus léger au plus lourd.


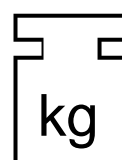
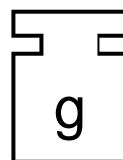


.....	.....	.....	.....	.....
-------	-------	-------	-------	-------

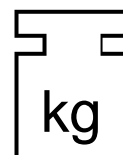
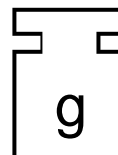
2) Léger ou lourd ? Colorie l'unité qui convient pour chaque objet.



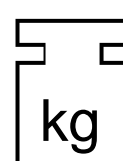
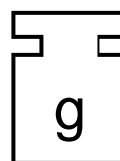
Un poulet rôti pèse 1



Une feuille de papier pèse 15




Une salade pèse 300



**MESURER DES MASSES**  
**SOLUTION**

**1) Écris dans les cases les numéros des dessins du plus léger au plus lourd.**


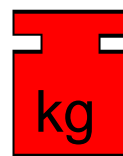
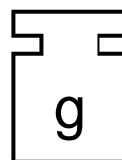


3	1	5	2	4
---	---	---	---	---

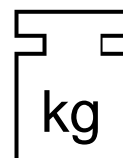
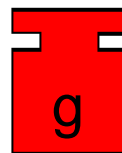
**2) Léger ou lourd ? Colorie l'unité qui convient pour chaque objet.**



Un poulet rôti pèse 1



Une feuille de papier pèse 15



Une salade pèse 300

