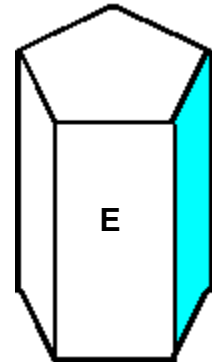
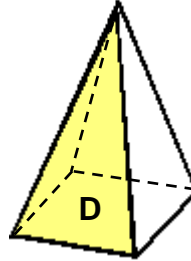
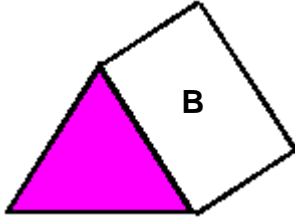
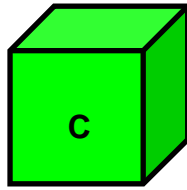
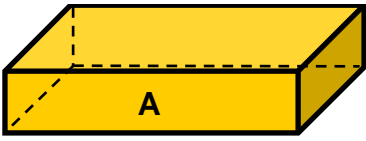


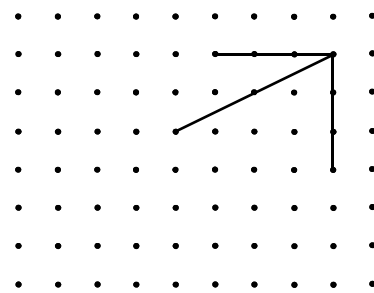
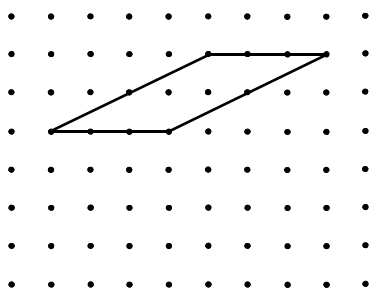
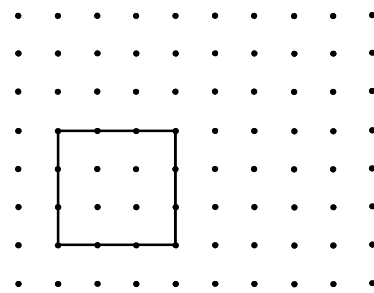
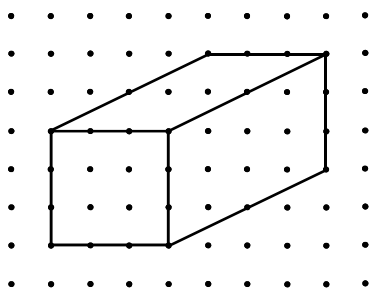
LES SOLIDES

1) Observe bien les solides puis complète le tableau.



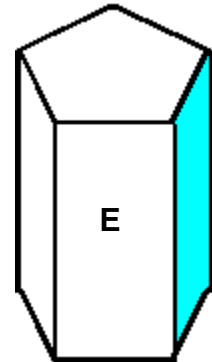
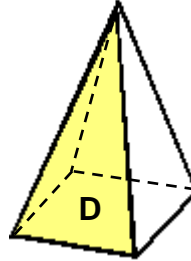
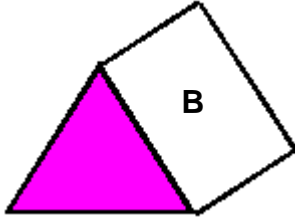
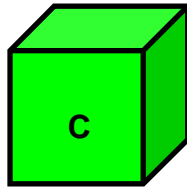
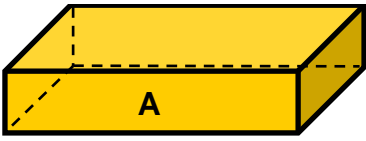
Solides	Nombre de faces	Nombre de sommets	Nombre d'arêtes
A
B
C
D
E

2) Reproduis le solide en te servant des points.



LES SOLIDES
SOLUTION

1) Observe bien les solides puis complète le tableau.



Solides	Nombre de faces	Nombre de sommets	Nombre d'arêtes
A	6	8	12
B	5	6	9
C	6	8	12
D	5	5	8
E	7	10	15

2) Reproduis le solide en te servant des points.

