

LES SOLIDES

- Indique pour chaque solide le numéro de sa trace dans le tableau ci-dessous.


1



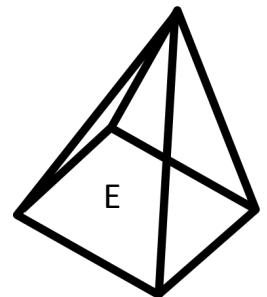
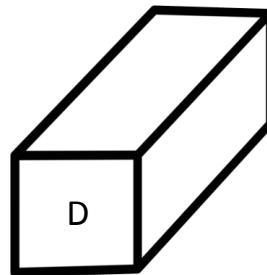
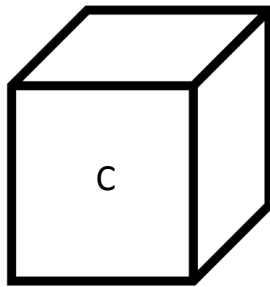
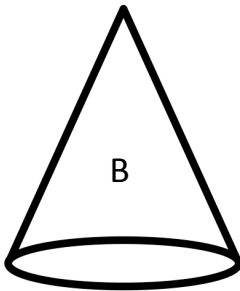
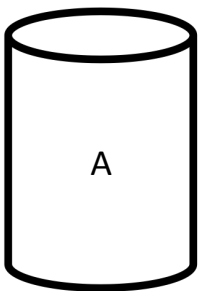
2



3



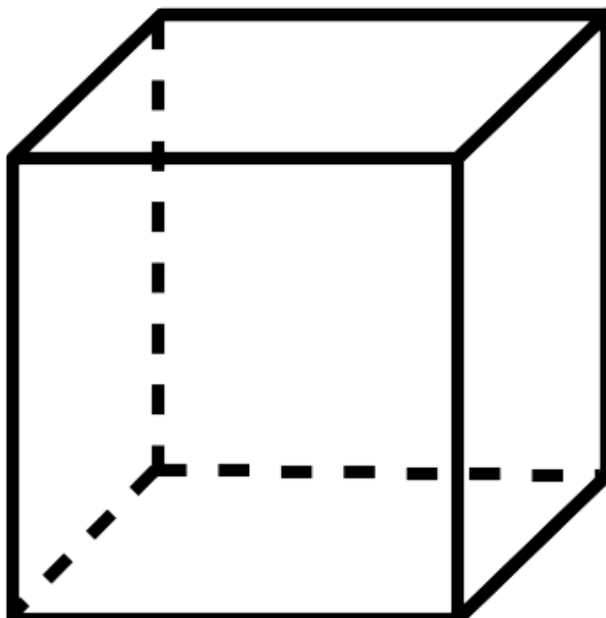
SOLIDE	A	B	C	D	E
TRACE					



- Sur le cube ci-dessous :

Marque d'un point rouge chacun des 8 sommets.

Repasse en bleu les 12 arêtes, y compris celles en pointillés



LES SOLIDES

- Indique pour chaque solide le numéro de sa trace dans le tableau ci-dessous.


1



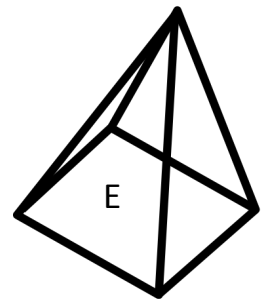
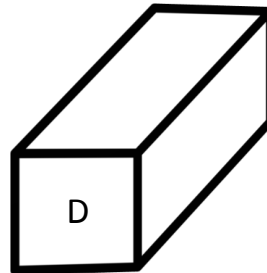
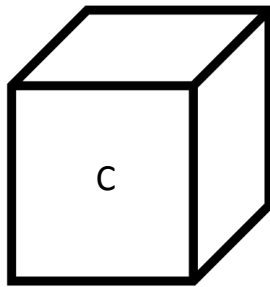
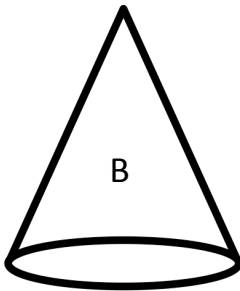
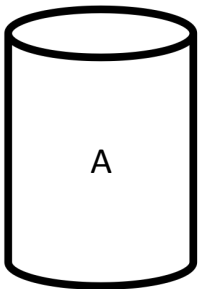
2



3



SOLIDE	A	B	C	D	E
TRACE	3	3	1	2	1



- Sur le cube ci-dessous :

Marque d'un point rouge chacun des 8 sommets.

Repasse en bleu les 12 arêtes, y compris celles en pointillés

